

Name:.....

Candidate Number.....

Seat Number.....

11+ Non-Verbal Reasoning Test

1. Put your name at the top of the paper.
2. Work as quickly as possible through the questions.
3. If you find a question difficult, move on and then come back to it if you have time.
4. Mark all answers clearly on your multiple choice answer sheet.

ElevenPlusMock

Paper B 2015

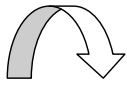
50 Questions in 40 minutes.

ElevenPlusMock.org.uk

Copyright © 2015 ElevenPlusMock

Which shape, or group of shapes, is the odd one out? Select one of A, B, C, D or E.

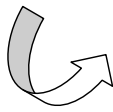
1



A



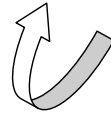
B



C



D



E


2



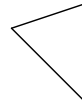
A



B



C



D

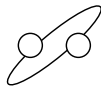


E

3



A




B



C

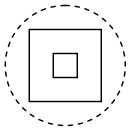


D

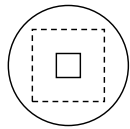


E

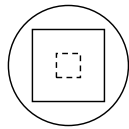
4



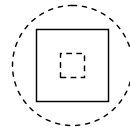
A



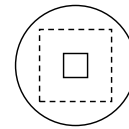
B



C

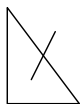


D

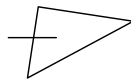


E

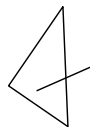
5



A



B



C



D



E

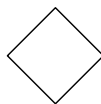
6



A



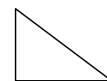
B



C

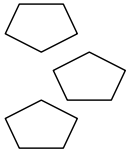


D

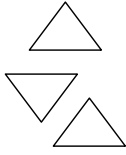


E

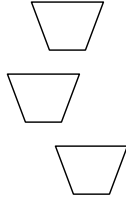
7



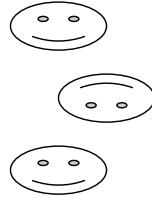
A



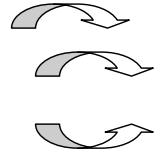
B



C




D



E


8



A



B



C



D

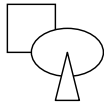


E

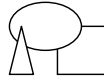
9



A



B



C

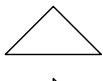


D

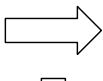


E

10



A



B



C

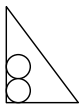


D

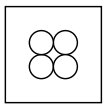


E

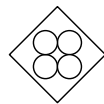
11



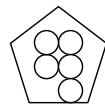
A



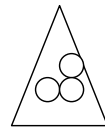
B



C



D

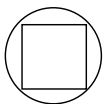


E

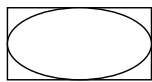
12



A



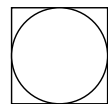
B



C



D

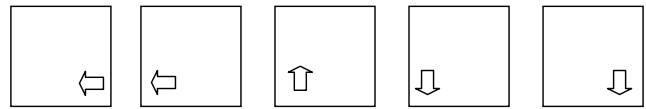
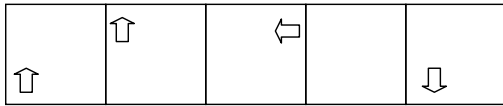


E

The five squares on the left contain shapes arranged in order to form a sequence. One of the squares is empty.

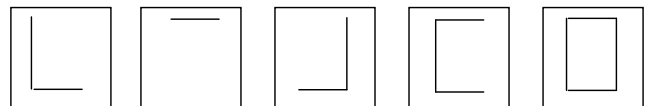
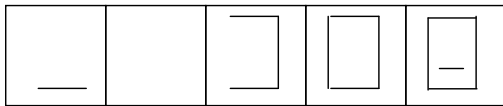
Choose which one of the five squares on the right should take the place of the empty square.

13



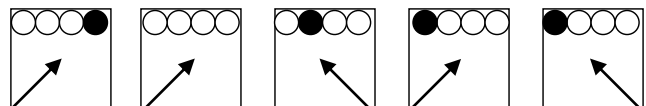
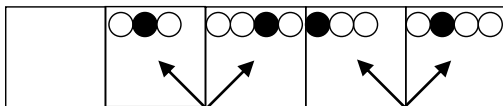
A B C D E

14




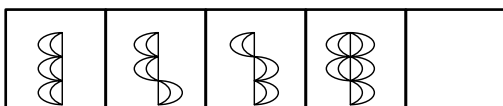
A B C D E

15



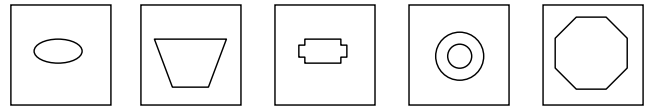

A B C D E

16



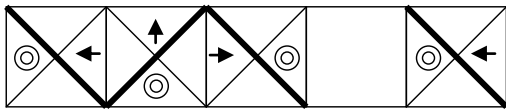
A B C D E

17



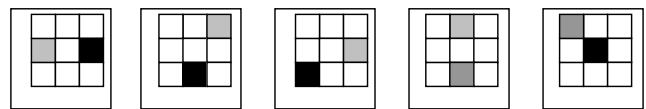
A B C D E

18




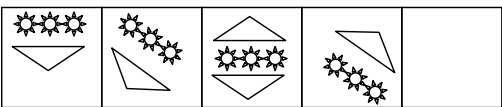
A B C D E

19



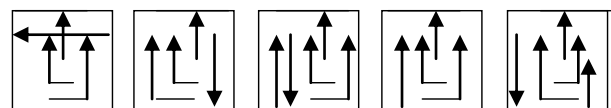
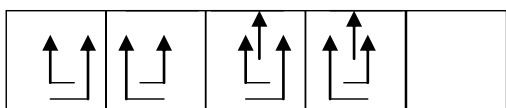
A B C D E

20



A B C D E

21



A B C D E

To answer these questions you have to work out a code. In the boxes on the left are shapes and the code letters that go with them. The top letters mean something different from the bottom ones. You must decide how the letters go with the shapes. Then find the correct code for the **test shape** from the set of five codes on the right.

22

					A	B	C	D	E	

23

					A	B	C	D	E	

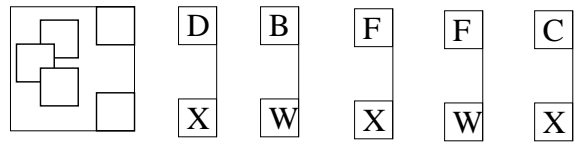
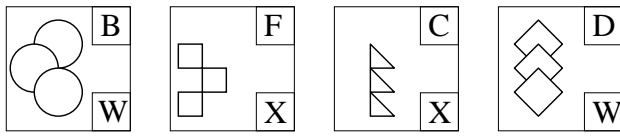
24

					A	B	C	D	E	

25

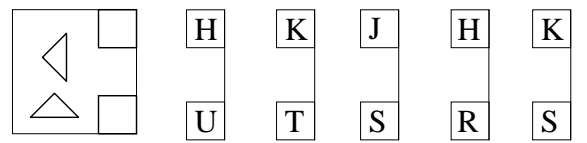
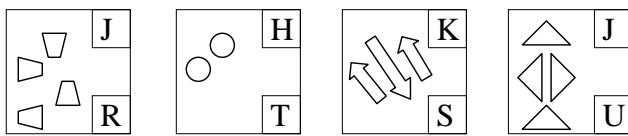
					A	B	C	D	E	

26



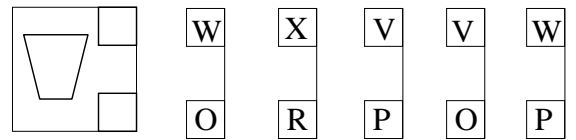
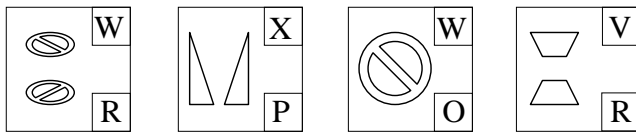
A B C D E

27



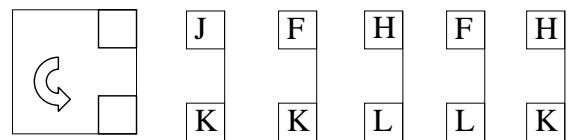
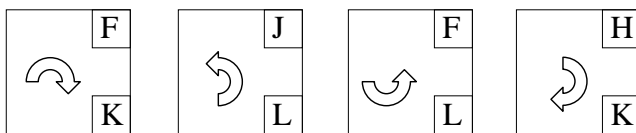
A B C D E

28



A B C D E

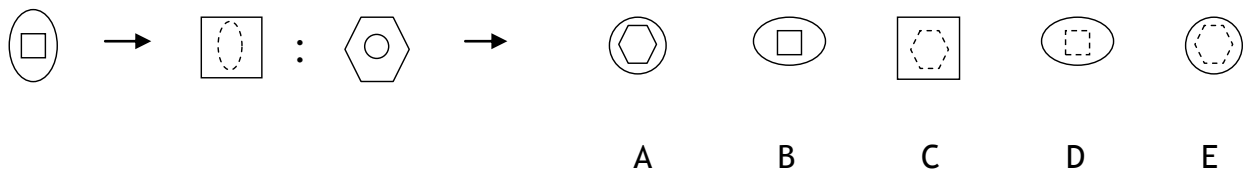
29




A B C D E

Which shape or pattern on the right best completes the second pair in the same way as the first pair?

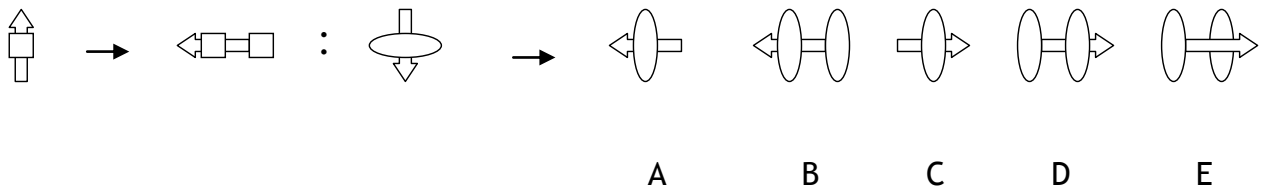
30



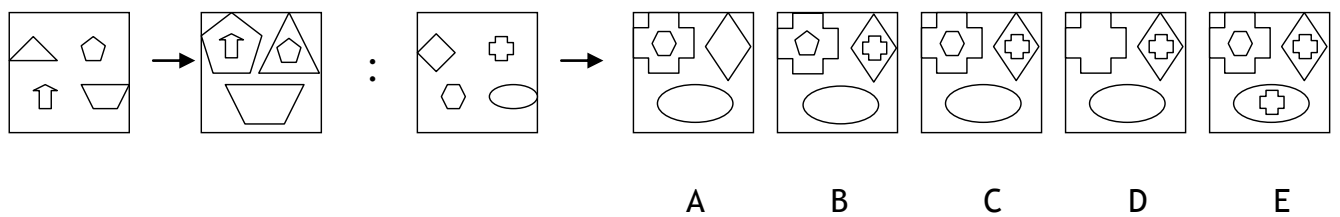
31



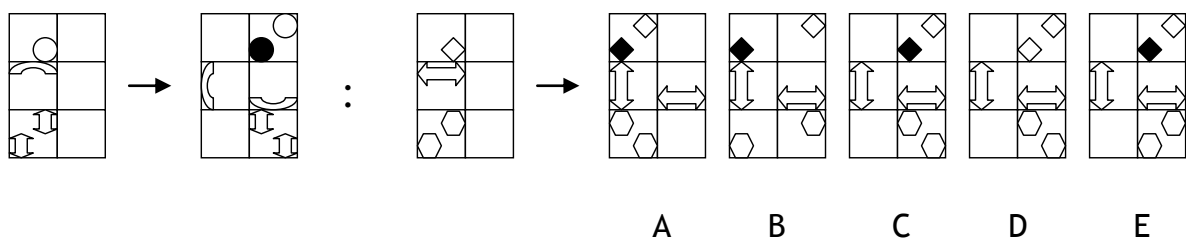
32



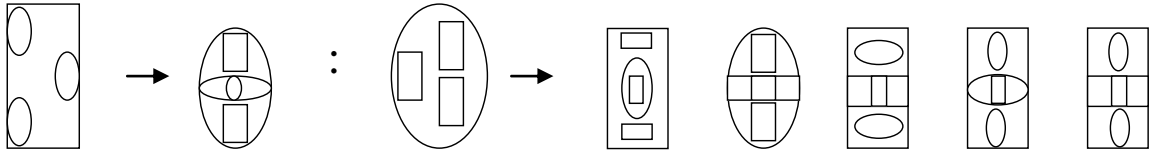
33



34

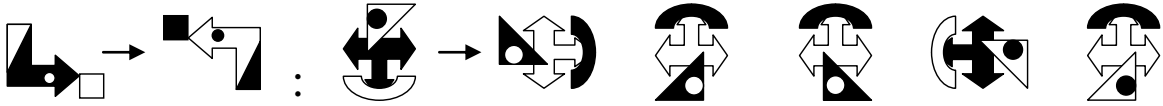


35



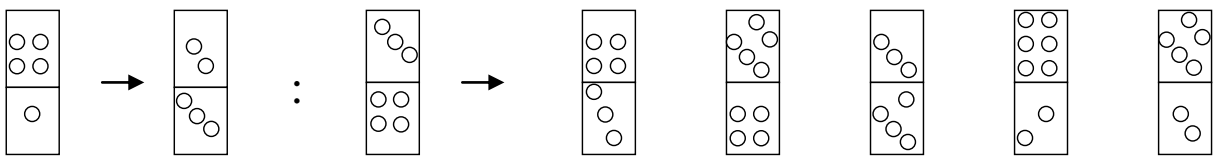
A B C D E

36



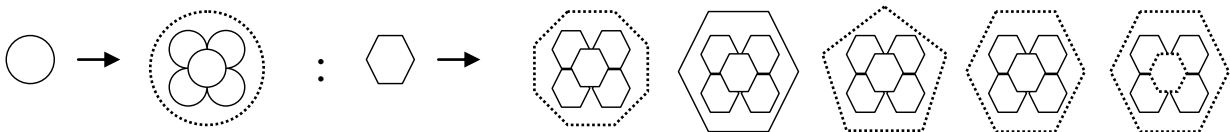
A B C D E

37



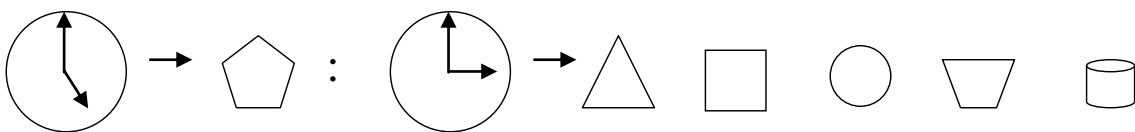
A B C D E

38



A B C D E

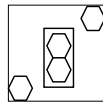
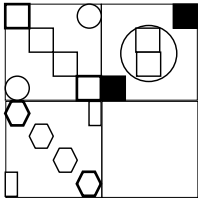
39



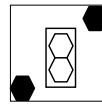
A B C D E

There is a blank box in every question. Suggest which box (A-E) would fit best in the empty space.

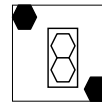
40



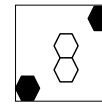
A



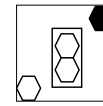
B



C

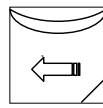
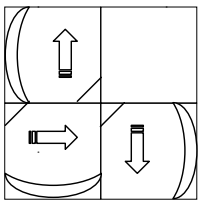


D

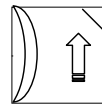


E

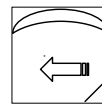
41



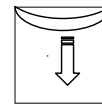
A



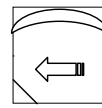
B



C





D



E

42



A



B



C

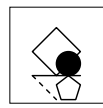
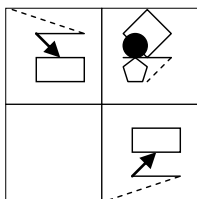


D

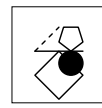


E

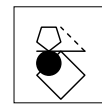
43



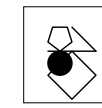
A



B



C

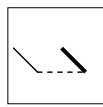
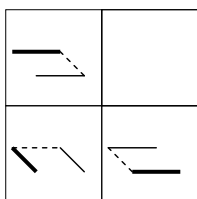


D

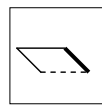


E

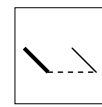
44



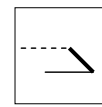
A



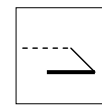
B



C



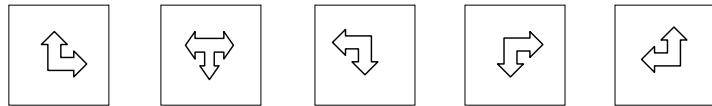
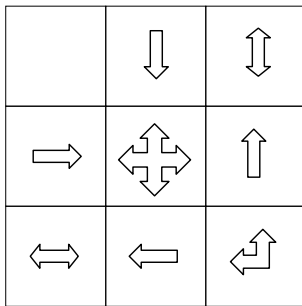
D



E

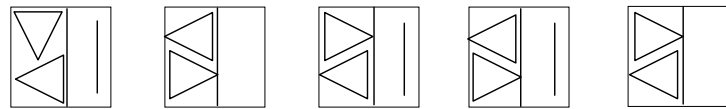

Choose the box on the right that best completes the big square.

45



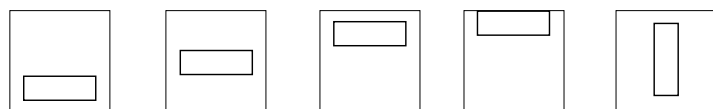
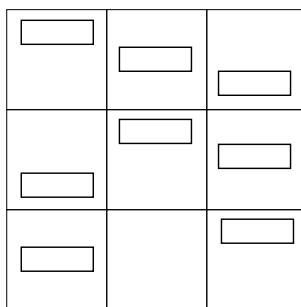
A B C D E

46



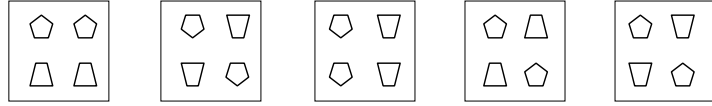
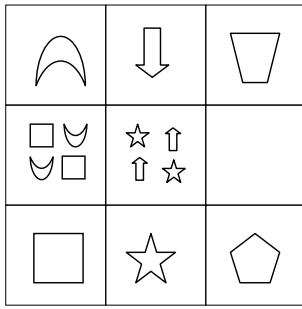
A B C D E

47



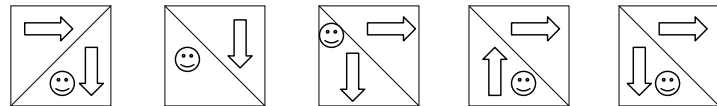
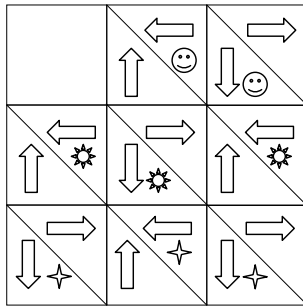
A B C D E

48



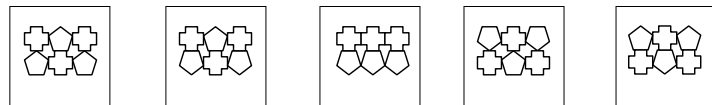
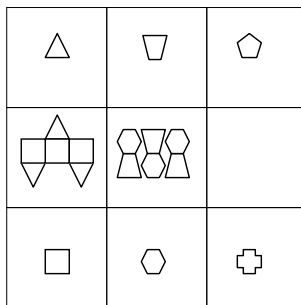
A B C D E

49



A B C D E

50



A B C D E

END of TEST